



Moderated item 1
SOCIAL STUDIES AND RELIGIOUS EDUCATION
Time Allowed: 2 Hours 15 Minutes

EMIS No.						Personal No.		
INDEX NUMBER								

Candidate's Name :
.....

Candidate's Signature :
.....

District Name :
.....

DO NOT OPEN THIS BOOKLET UNTIL YOU ARE TOLD TO DO SO.

Read the following instructions carefully:

1. This paper has **two** sections: **A** and **B**.
2. Section **A** has 40 questions (40 marks)
Section **B** has 15 questions (60 marks)
3. Answer all questions. All questions to both Sections **A** and **B** must be written in the spaces provided.
4. All answers must be written using a blue or black ball-point pen or fountain pen.
5. Unnecessary changes of work may lead to **loss** of marks.
All diagrams must be drawn in pencil.
6. Any handwriting that cannot easily be read may lead to **loss of marks**.
7. Do **not** fill anything in the boxes indicated:
"For Examiners' Use Only"

FOR EXAMINERS' USE ONLY		
Qn. No.	MARKS	EXRS' IN.
1 – 20		
21 – 30		
31 – 50		
51 – 53		
54 – 55		

SECTION A

1. Name the town in Ghana crossed by the prime meridian?

.....
.....

2. Name the largest lake in Uganda formed as a result of down warping?

.....
.....

3. Give any one way Dr. David Livingstone led to the colonization of Africa?

.....
.....

4. State any one way a mobile phone is similar to a torch?

.....
.....

5. Name the capital city of Rwanda.

.....
.....

6. State any one reason why subsistence farming is cheap.

.....
.....

7. Give any one reason why people who live in highland areas terrace their farm land?

.....
.....

8. Give any one reason why the Bantu settled in the fertile highlands of southern Africa.

.....
.....

9. Give another name for a swamp.

.....
.....

10. State any one characteristic of a political party in Uganda.

.....
.....

11. Apart from introducing the printing press, give any one way Alexander Mackay helped people in Uganda.

.....
.....
.....

12. State any one cause of mudslides in East Africa today?

.....
.....
.....

13. Give any one reason why it is important to dress smartly in public.

.....
.....
.....

14. What name is given to moving air in a given place?

.....
.....

15. State any one reason why it is necessary for every pupil to belong to a family.

.....
.....
.....

16. Give any one way unity and co-operation among people is important today.

.....
.....

17. Name the type of trade that involves many countries.

.....
.....

18. State any one factor that forced colonialists to grant Africans their independence.

.....
.....

19. Give any one reason why candidates are encouraged to form discussion groups at school.

.....
.....
.....

20. How is a barometer important in a weather station?

.....
.....
.....
21. Give any one way wild birds are economically good for Uganda.

.....
.....
.....
22. Name the country in Africa which was a home for freed slaves?

.....
.....
.....
23. State any one reason why desks are important in class.

.....
.....
.....
24. State any one reason why the government of Uganda discourages idleness in public.

.....
.....
.....
25. Name any one country in Africa where FRELIMO fighters were trained.

.....
.....
.....
26. Give any one reason why Uganda is called a land locked nation.

.....
.....
.....
27. State any one reason why the blacks hated the white settlers.

.....
.....
.....
28. Give any one use of a funnel in a rain gauge.

.....
.....
29. State any one way of solving crimes in a country like Uganda.
.....
.....
.....

.....
30. Name any one domestic animal that man can keep for company.
.....
.....

.....
31. State any one reason why Sahara Desert was less explored by Europeans.
.....
.....
.....

.....
32. Give any one political importance of River Ruvuma.
.....
.....

.....
33. Name the only glacial lake around Mt. Rwenzori in Uganda.
.....
.....

.....
34. State any one importance of major cash crops grown in Zanzibar islands.
.....
.....
.....

.....
35. State any one way a capital city is important in a country.
.....
.....

For questions 36 – 40, answer Either Christianity Or Islamic but not both.

36. Either:

In which one way was the creation of Adam different from other creatures?
.....
.....

Or:

In which one way was the creation of Adam different from other creations?
.....
.....

37. Either:

How did God examine Abraham's faith?

.....
.....

Or:

How did Allah examine Ibrahim's faith?

.....
.....

38. Either:

Who ate the forbidden fruit first?

.....
.....

Or:

Who was the first sinner in Islam?

.....
.....

39. Either:

State any one value of fasting for 40 days in Christianity.

.....
.....

Or:

State any one value of fasting for 30 days in Islam.

.....
.....

40. Either:

What title is given to the followers of Jesus today?

.....
.....

Or:

What title is given to the followers of Prophet Muhammad today?

.....
.....

SECTION B

41. Give any two ways each of the following organisations helped in ending apartheid policy in South Africa.

(a) Organisation of African Unity. (OAU)

- i.
.....

ii.
.....

(b) Common Wealth Organisation. (CWO)

i.
.....

ii.
.....

42.

(a) What is population census?

.....
.....
.....

(b) Give any two reasons why population census is necessary for a country like Uganda.

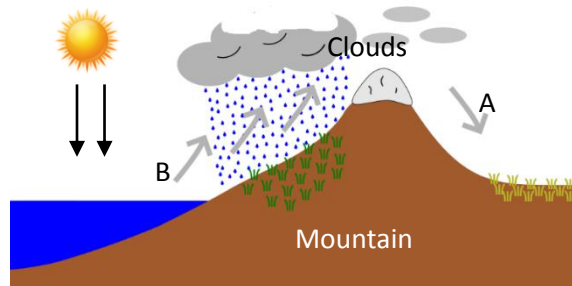
i.
.....

ii.
.....

(c) Which Ministry is responsible for carrying out population census?

.....
.....

43. Study the diagram below and use it to answer questions below it.



(a) Name the side of the mountain marked:

A B
.....

(b) What type of rainfall is received in the area above?

.....
.....
(c) Which side of the mountain would be good for farming?
.....
.....

44.

(a) State any two human activities in Equatorial regions in DRC.

- i.
.....
- ii.
.....

(b) Name any two plantation crops that are grown in Equatorial climate region.

- i.
.....
- ii.
.....

45.

(a) Name the two types of taxes colonialists imposed on Africans.

- i.
.....
- ii.
.....

(b) Give any one way colonial government used the taxes Africans paid to them.
.....
.....

(c) State any one reason why Africans disliked the taxes above?
.....
.....

46.

(a) Name the major pastoral tribe in Nigeria.
.....
.....

(b) Name the main means of transport the above pastoral tribe uses to survey grazing lands.
.....
.....

(c) Give any two ways the Fulani benefit from the cattle they rear.

- i.
.....

ii.
.....

47.

(a) Name the first railway to be constructed in E. Africa in 1893?

.....
.....

(b) State any two challenges railway builders faced in East Africa.

i.
.....

ii.
.....

(c) Give any one way the railway builders were able to construct railways across rivers.

.....
.....

48.

(a) Name two types of forests in Uganda.

i.
.....

ii.
.....

(b) Give any two ways forests support people's health.

i.
.....

ii.
.....

49.

(a) Name the first Indian trader to open up a shop in Kampala.

.....
.....

(b) Apart from opening up shops and sugar cane growing, mention two economic contributions of Indians to Uganda.

i.
.....

ii.
.....

(c) State any one way Ugandans have benefited from Kakira sugar works.

.....
.....

50.

(a) State any one role played by the following groups of people in Uganda.

i. Uganda People's Defence Force (UPDF)

.....
.....

ii. Uganda Prisons.

.....
.....

(b) State any one way the work of Uganda Police is similar to that of Uganda Prisons.

.....
.....

(c) Give any one challenge faced by the Uganda Police as they carry out their duty.

.....
.....

For questions 51 – 55, answer Either Christianity Or Islamic part but not Both alternatives in the same number.

51. Either:

(a) Name any two free services you as a Christian can offer to your church.

i.
.....

ii.
.....

(b) Give any one way the church gives free services to the people in the community.

.....
.....

(c) State any one lesson you as a Christian can learn from the above acts.

.....
.....

Or:

(a) Name any two free services you as a Moslem can offer to your mosque.

i.
.....

ii.
.....

(b) Give any one way the Moslems give free services to the people in the community.

.....
.....

(c) State any one lesson you as a Moslem learn from the acts above.

.....
.....
52. Either:

(a) Give any two reasons why pupils need to pray before:

i. sleeping.
.....
.....

ii. eating food.
.....
.....

iii. Sitting for examinations.
.....
.....

(b) State any one advantage of reading the Bible every day.
.....
.....

Or:

(a) Give any two reasons why pupils need to pray before:

i. sleeping.
.....
.....

ii. eating food.
.....
.....

iii. sitting for examinations.
.....
.....

(b) State one advantage of reading the Qur'an every day.
.....
.....

53. Either:

(a) Give any two reasons why it is not good to worship small gods today.

i.
.....

ii.
.....

(b) Give any two reasons why witchcraft is discouraged in our Christian communities today.

i.
.....

ii.
.....

Or:

(a) Give any two reasons why it is not good to worship small gods today.

i.
.....

ii.
.....

(b) Give any two reasons why witchcraft is discouraged in our Islamic communities today.

i.
.....

ii.
.....

54. Either:

(a) State any two ways churches have created employment to most people in Uganda today.

i.
.....

ii.
.....

(b) Give any two ways churches solve the challenge of lack of enough funds today.

i.
.....

ii.
.....

Or:

(a) State any two ways mosques have created employment to most people in Uganda today.

i.
.....

ii.
.....

(b) State any two way mosques solve the challenge of lack of enough funds today.

i.
.....

ii.
.....

55. Either:

(a) Give any two reasons why Christians take Jesus as their personal saviour.

i.
.....

ii.
.....

(b) State any one reason why Jesus Christ is referred to as God by Christians.

.....
.....

(c) Give any one way Jesus Christ suffered in order to save mankind.

.....
.....

Or:

(a) Give any two reasons why Moslems take Prophet Muhammad as a true Prophet of Allah.

i.
.....

ii.
.....

(b) Give any one reason why Prophet Muhammad is referred to as Amiin by Moslems.

.....
.....

(c) State any one reason why Prophet Muhammad migrated from Mecca to Medina.

.....
.....

*****END*****



Moderated item 2
SOCIAL STUDIES AND RELIGIOUS EDUCATION
Time Allowed: 2 Hours 15 Minutes

SECTION A

56.Name any one cardinal point of a compass.

.....
.....

57.Mention the district in North Eastern Uganda where Kidepo National Park is located.

.....
.....

58.What service do barbers provide to the community?

.....
.....

59.Mention the country in East Africa that had many white settlers during colonial rule.

.....
.....

60.Give one way improved Technology can lead to Agricultural development.

.....
.....
.....
.....

61. Mention one activity carried out in a school assembly.

.....
.....

62. Why have some people living on the slopes of mountain Elgon resisted relocation?

.....
.....
.....

63. Give one social activity that unites people in the community.

.....
.....

64. Give one importance of the National symbol below?



.....
.....
.....
.....

65. State one service that was offered by the defunct East African Community.

.....
.....

66. What is the main duty of a District Registrar?

.....
.....

67. How does the police control child abuse in the community?

.....
.....

68. Name the country that hosted the first Pan African Conference in Africa in 1958.

.....
.....

69. Why were some Africans against Foreign Laws introduced in Uganda during the colonial period?

.....
.....
.....
.....

70. How is a herbalist important in the community?

.....
.....

71. State one factor that has favoured the growth of mangrove trees at the coast of East Africa.

.....
.....

72. How do communities ensure security in their areas?

.....
.....

73. State one commercial activity carried out in a market.

.....
.....

74. What does the hoisting of the Uganda flag at a half-mast symbolize?

.....
.....

75. Give one social contribution of Dr. David Livingstone to the people of East Africa.

.....
.....

76. How can children ensure security at home?

.....
.....

77. Give one modern method of fish preservation in Uganda.

.....
.....

78. What is the importance of clan leaders in our community?

.....
.....
.....
.....

79. How can the citizens of the country be made to have trust in democracy?

.....
.....
.....
.....

80. In which way can the judiciary bring peace in a country?

.....
.....
.....
.....

81. What is the importance of trade licenses to the government?

.....
.....

82. Name one tourist attraction found in north eastern Uganda.

.....
.....

83. How can population growth lead to the environmental degradation?

.....
.....
.....
.....

84. In which one way is using mobile phones a problem to many Ugandans?

.....
.....

85. What is the major role played by NEMA in Uganda?

.....
.....

86. Name one new member state of the East African Community.

.....
.....

87. How is Lake Tanganyika politically important to both Tanzania and Democratic Republic of Congo?

.....
.....
.....
.....

88. In which way did the political injustices lead to the rise of Pan-Africanism?

.....
.....
.....
.....

89. What is the importance of the African Union Peace and Security Council to Africa?

.....
.....

90. In which way can the government of Democratic Republic of Congo promote good road network?

.....
.....
For questions 36 – 40, answer Either Christianity Or Islam but not both alternatives.

91. Either: Name the book in the Bible that talks about the journey of the Israelites to the promised land.

.....
.....
Or: What name is given to Prophet Muhammad’s journey from Mecca to Medina?

.....
.....
92. Either: State any one reason why Christians should do what is right all the time.

.....
.....
Or: Mention any one reason why a Muslim should behave well.

.....
.....
93. Either: State any one way Christians express love and kindness to those in need.

.....
.....
Or: State any one way Moslems show love and kindness to those in need.

.....
.....
94. Either: Name one symbol of God’s covenant with his people.

.....
.....
Or: Give any one sign of purity in Islam.

.....
.....
95. Either: State any one way Christians reconcile with their God after sinning.

.....
.....
Or: What should a Muslim do after sinning to Allah?
.....
.....

SECTION B

96. (a) Name the line of longitude that passes through Accra in Ghana.
.....
.....

(b) Give the two parts of the world as divided by the equator.

i.
.....

ii.
.....

(c) In which part of the world is the largest part of Uganda according to the equator?
.....
.....

97. (a) Name any one tribe of people who live in semi-arid areas of Uganda.
.....
.....

(b) In which one way do the people who live in the semi-arid areas of East Africa earn a living?
.....
.....

(c) State any one problem faced by people who live in semi-arid areas of East Africa.
.....
.....

(d) How can Semi-Arid areas of East Africa be put under effective agriculture?

.....
.....

98. (a) Name the international organisation meeting that was held in Uganda in 2007.

.....
.....

(b) Write CHOGM in full.

.....
.....

(c) What two benefits did Uganda gain for hosting CHOGM in 2007?

i.
.....

ii.
.....

99. (a) Name the country in Africa with the highest population.

.....
.....

(b) Mention any one problem the country you have named in (a) above faces as a result of its high population.

.....
.....

(c) State the region of Africa where Nigeria is found.

.....
.....

(d) State one factor responsible for high population in the country above.

.....
.....

100. (a) Name any two Bantu tribes found in Eastern Uganda.

i.
.....

ii.
.....

(b) Give any two tribes that carry out circumcision in Uganda as ritual.

i.
.....

ii.
.....

101. (a) Name the missionary group which arrived in Uganda in 1879.

.....
.....

(b) State any three ways how the missionaries improved the lives of Ugandans.

i.
.....

ii.
.....

iii.
.....

102. (a) Name any one feature on the Uganda coat of arms.

.....
.....

(b) State the feature on the Uganda coat of arms representing vegetation.

.....
.....

(c) In which two ways has the Uganda Motto kept Ugandans together?

i.
.....

ii.
.....

103. (a) Under which organ of the government do you put high courts?

.....
.....
(b) State any three titles used in the judiciary in Uganda.

i.

.....

ii.

.....

104. Use the map of Africa below to answer question 49.



(a) State any two economic activities carried out in the area marked xxxx.

i.

.....

ii.

.....

(b) Name the vegetation region covered by the area marked T.

.....
.....

(c) Name the highland marked by letter V.

.....
.....

105. (a) Name the Headquarters of the East African parliament.

.....
.....

(b) What makes Uganda a member of the East African Community?

.....
.....

(c) Give any two benefits of the East African Community to its member states.

i.
.....

ii.
.....

For questions 51 – 55, answer Either Christianity Or Islam but not both alternatives.

106. Either:

(a) Name any one voluntary service a Christian can offer to the church.

.....
.....

(b) Give any two ways the church offers voluntary services to people in the communities today.

i.
.....

ii.
.....

(c) What lesson do you learn from giving free services to others?

.....
.....

Or:

(a) Mention any two contributions a Muslim can make towards the mosque.

i.
.....

ii.
.....

(b) State any two things Moslems get from offering free services to others.

i.
.....

ii.
.....

107. Either:

(a) How do we communicate to God as a Christian?

.....
.....

(b) Give any three reasons why Christian families should pray together.

i.
.....

ii.
.....

iii.
.....

Or:

(a) In what way do Moslems communicate to their Allah?

.....
.....

(b) Mention any two reasons why Muslims are encouraged to pray together.

i.
.....

ii.
.....

(c) Name the last prayer said by Moslems every day.

.....
.....

108. Either:

(a) Give any two situations in the Bible when Jesus Christ used his authority over nature.

i.
.....

ii.
.....

(b) State any two reasons why Jesus used such authority over nature.

i.
.....

ii.
.....

Or:

(a) Give any two ways Prophet Mohammed used his authority over situations.

i.
.....

ii.
.....

(b) State any two reasons why Prophet Mohammed used such authority over situations.

i.
.....

ii.
.....

109. Either:

(a) Name the person in the Bible who said “Love one another as I have loved you.”

.....
.....

(b) Why is the above person referred to as God by Christians?

.....
.....

(c) Give any two ways the above person was mistreated according to the bible.

i.
.....

ii.
.....

Or:

(a) Name the prophet in Islam who was called “Al-Ameen.”

.....
.....

(b) Why was the above prophet called so?

.....
.....

(c) Why did utbah the cousin of the above prophet spit publically on his face.

.....
.....

(d) Give any one reason why it is not good to keep ill feelings from those who wrong you.

.....
.....

110. For both:

(a) Give any two similarities between Islam and Christianity.

i.
.....

ii.
.....

(b) State any two differences between Christianity and Islam.

i.
.....

ii.
.....

*****END*****



Moderated item 3
SOCIAL STUDIES AND RELIGIOUS EDUCATION
Time Allowed: 2 Hours 15 Minutes

SECTION A

111. Name the country that neighbours Tanzania in the southern direction.

.....
.....

112. Name the best means of transport over sand dunes in the Sahara Desert.

.....
.....

113. Give any one way telephone companies in Uganda benefit from hills.

.....
.....

114. State any one way bad roads affect trade activities in an area.

.....
.....

115. Give any one way increase in level of prices affects prices of goods in an area.

.....
.....

116. Name the ministry in charge of tourism and wildlife in Uganda.

.....
.....

117. Write UNICEF in full.

.....
.....
.....

118. State any one reason why swamp reclamation is important in an area.

.....
.....
.....
.....

119. Name the type of tax charged on locally made goods.

.....
.....

120. What kind of vegetation grows best in salty waters of the coast.

.....
.....

121. Name any one national game park famous for mountain gorillas.

.....
.....

122. State any one dangers of some vegetation in our environment.

.....
.....

123. What is a clan?

.....
.....

124. Who are Immigrants?

.....
.....

.....
.....
125. State any one challenge government meets in providing social services.

.....
.....
126. Give any one example of crafts made from local materials in the environment.

.....
.....
127. State any one reason why traders buy and sell goods in market areas.

.....
.....
128. Give any one reason why children who perform well in schools need to be given gifts.

.....
.....
129. State any one challenge people get as they carry out their daily duty of farming.

.....
.....
130. State any one way too much rain is dangerous to potters.

.....
.....
131. Give any one reason why most people have failed to start any business in Uganda.

.....
.....
132. Why is marriage introduction ceremony regarded as a social activity?

.....
.....
133. State any one advantage of having a district headquarters in an area.

.....
.....
134. State any one way thieves are dangerous in society.

.....
.....
135. Give any one example of a local material made from clay soil.

.....
.....
136. Name any social activity that promotes friendship among people in our community.

.....
.....
137. Give any one way the government of Uganda is promoting the provision of medical services.

.....
.....
138. Give any one way petrol stations are important to people who own vehicles.

.....
.....
139. State any one reason why people need safe drinking water sources in their communities.

.....
.....
140. Give the use of an anemometer in a weather station.

.....
.....
141. State any one way armed forces provide security in our country.

.....
.....
142. Give any one way the government of Uganda supports her farmers.

.....
.....
143. State any one reason why family planning services is good in a country.

.....
.....
144. Give any one way of fighting corruption in our society.

.....
.....
145. What is mechanization in agriculture?

.....
.....
For questions 36 – 40, answer Either Christianity Or Islam but not both alternatives.

146. Either:

Who was the mother of Jesus?

.....
.....
Or:

Who was the mother of Prophet Isa?

.....
.....
147. Either:

Which important event took place on Palm Sunday?

.....
.....
Or:

Which important event took place on Hejira?

148. Either:

What was the work of Moses before he was called by God?

.....
.....

Or:

What was the work of Musa before he was called by Allah?

.....
.....

149. Either:

In which book in the Bible is the story of creation?

.....
.....

Or:

What is hadith in Islam?

.....
.....

150. Either:

State any one way Christians use water to serve God.

.....
.....

Or:

State any one way Moslems use water to serve Allah.

.....
.....

SECTION B

151. (a) Who heads the judiciary of the Uganda government by title of office?

.....
.....

(b) State any two challenges facing the Judicial organ in Uganda today.

- i.
.....

ii.
.....

(c) What is the role of the judiciary?
.....
.....

152. Match minerals in list A with the places where they are mined in list B.

A

B

(a) Cobalt

Kabale

(b) Salt

Kasese

(c) Wolfram

Tororo

(d) Phosphates

Lake Katwe

(a) Cobalt
.....
.....

(b) Salt
.....
.....

(c) Wolfram
.....
.....

(d) Phosphate
.....
.....

153. (a) What term is used to mean the buying and selling of goods and services.
.....
.....

(b) State any two factors that attract business people in an area.
i.
.....

ii.
.....

(c) Give any one challenge traders selling similar goods face in an area.

.....
.....

154. The table below shows rainfall and temperature recorded in a region. Study it and answer questions that follow.

Months	J	F	M	A	M	J	J	A	S	O	N	D
Temperature	21	24	28	31	31	28	36	25	26	27	24	22
Rainfall (mm)	0	0	3	11	69	117	206	310	142	13	0	0

(a) Name any one month where rainfall was received.

.....
.....

(b) In which month was the highest amount of rainfall received?

.....
.....

(c) What was the temperature range?

(d) What kind of climate is shown on the table.

.....
.....

155. (a) Name the Ugandan politician who formed the first political party.

.....
.....

(b) State any two difficulties faced by nationalists during the struggle of independence.

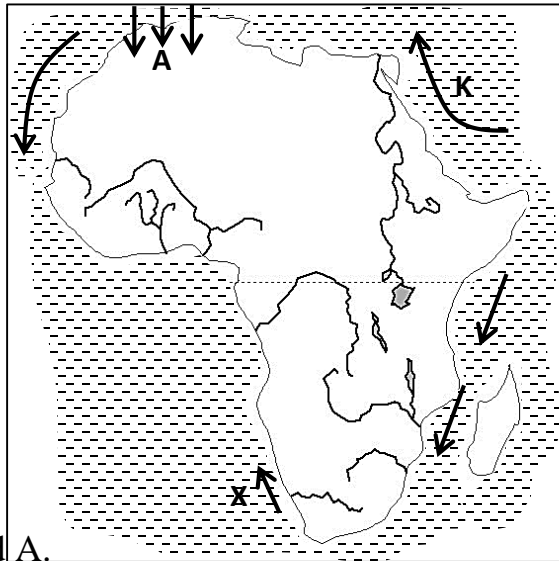
i.
.....

ii.
.....

(c) Mention any one event that took place on 9th October, 1962 to show that Uganda had acquired freedom from colonialism.

.....
.....

156. Study the map of Africa below and use it to answer questions that follow.



(a) Name the winds marked A.

.....
.....

(b) Name the ocean current marked X.

.....
.....

(c) Why don't winds marked A form rainfall in an area?

.....
.....

(d) Name the water body marked K on the map.

.....
.....

157. (a) Name the body which unites all the oil producing countries in Africa.

.....
.....

(b) Mention the largest oil producing country in Africa.

.....
.....
(c) In which two ways do member states benefit from the body in (a) above.

i.
.....

ii.
.....

158. (a) What word is used to refer to a group of people who share similar origin and speak related languages.

.....
.....
(b) State any two factors that show that Bagishu and Baganda are in the same origin.

i.
.....

ii.
.....

(c) Why were the Bantu able to form kingdoms?

.....
.....
.....
.....
159. (a) What are empire free states?

.....
.....
(b) State any one reason why Liberia was not colonized.

.....
.....
(c) Give any two negative results of colonial administration in Uganda.

i.
.....

ii.
.....

160. (a) What are primary industries?

.....
.....
.....

(b) State two advantages of having primary industries in a country.

i.
.....

ii.
.....

(c) State any one disadvantage of an industry constructed far away from the source of raw materials.

.....
.....

For questions 51 – 55, answer Either Christianity or Islam but not both alternatives. No marks will be awarded to a candidate who attempts both alternatives.

161. Either:

Match the days of the Christian calendar in list A with their meanings in list B.

List A

List B

(a) Ascension Day.

Day Jesus was born.

(b) Holy Thursday

Day Jesus went to heaven.

(c) Christmas day

Marks beginning of fasting.

(d) Ash Wednesday

Day Jesus served the last supper to the apostles.

(a) Ascension Day.

.....
.....

(b) Holy Thursday

.....

.....

(c) Christmas day

.....

.....

(d) Ash Wednesday

.....

.....

Or:

Match the information in list A with that in list B.

List A

List B

(a) Miraj

(b) Eid-el-fitr

(c) Umra

(d) Isra

(a) Miraj

.....

.....

(b) Eid-el-fitr

.....

.....

(c) Umra

.....

.....

(d) Isra

.....

.....

162. Either:

(a) What does the word 'seed' mean in the parable of the sower?

.....
.....

(b) State any two reasons why some Christians fail to practice what has been preached to them.

i.
.....

ii.
.....

(c) How do priests help Christians to practice what has been preached?

.....
.....

Or:

(a) What does the Islamic word Kutubah mean?

.....
.....

(b) State any two reasons why some Moslems fail to practice what has been preached to them.

i.
.....

ii.
.....

(c) State any one way Imams help Moslems to fear Allah.

.....
.....

163. Either:

(a) How did the death of Jesus Christ affect Christians?

.....
.....

(b) Name the first two people to see the empty tomb of Jesus.

i.
.....

ii.
.....

(c) Why was Simon Peter able to preach the word of God?

.....
.....

Or:

(a) Apart from Abubaker, name any other two caliphs of Prophet Muhammad.

i.
.....

ii.
.....

(b) Mention two reasons why Abubaker was chosen as the first caliph.

i.
.....

ii.
.....

164. Either:

“Let the little children come to me”.

(a) Who said those words?

.....
.....

(b) To whom did he say them to?

.....
.....

(c) What two lessons do you learn from the Bible quotation above?

i.
.....

ii.
.....

Or:

(a) Give any two benefits of following Prophet Muhammad's teaching and sayings to a Moslem?

i.
.....

ii.
.....

(b) Give any two ways of caring for children in Islam.

i.
.....

ii.
.....

165. For Both:

(a) Who is a martyr?

.....
.....

(b) Give any lessons Christians and Moslems learn from martyrs.

i.
.....

ii.
.....

(c) State any one reason why Christians and Moslems go for pilgrimage.

.....
.....

*****END*****



Moderated item 4
SOCIAL STUDIES AND RELIGIOUS EDUCATION
Time Allowed: 2 Hours 30 Minutes

SECTION A

166. Name the instrument used in a school to change periods during lessons.

.....
.....

167. What type of leadership is gained through inheritance?

.....
.....

168. Give one human activity which promotes vegetation growth in an area.

.....
.....

169. In which one way did migration lead to social change of people's culture?

.....
.....

170. In which one way did the coming of Explorers promote economic development of East Africa?

.....
.....

171. State any one way people are benefiting from democracy in East Africa.

.....
.....

172. Which country did Hastings Kamuzu Banda help to fight for independence?

.....
.....

173. Give one way in which water bodies determine the climate of Africa.

.....
.....

174. In which one way is parental guidance important to school children?

.....
.....

175. Why should people be encouraged to control water pollution in East Africa?

.....
.....
.....

176. Apart from a sign post, mention any one other feature used to locate a school.

.....
.....

177. In which one way do teachers keep peace and security in a school?

.....
.....

178. Mention any one activity funded by the Commonwealth of nations.

.....
.....

179. State any one reason why the population of Uganda should be controlled.

.....
.....

180. What is the main problem caused by a result of failure to work?

.....
.....

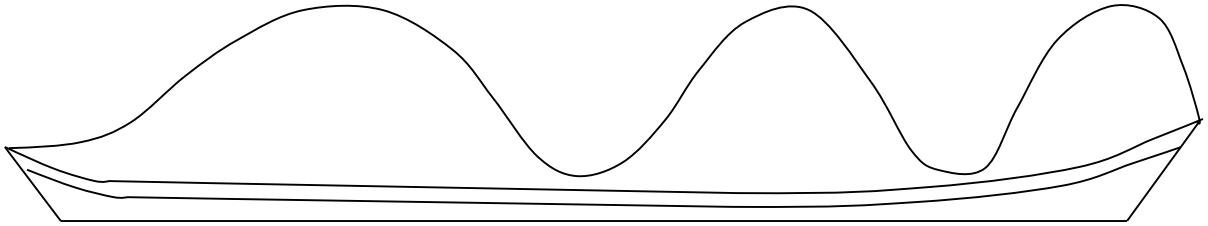
181. In which one way did the British help Uganda to become a nation?

.....
.....

182. State any one way of caring for animal resource in Uganda.

.....
.....
183. Give one reason why mineral resource should be well managed.

.....
.....
184. When did Uganda gain its political independence?



.....
.....
185. Name the type of mountains formed by the above process.

.....
.....
186. Which government organ is responsible for all social services which were introduced by missionaries?

.....
.....
187. In which one way cooperation among states help to develop Africa?

.....
.....
188. State the climatic region which his crossed by the Equator in Democratic Republic of Congo.

.....
.....
189. State any one benefit traders get from a good means of transport.

.....
.....
190. Name the common service provided by the government for transport.

.....
.....
191. Give any one way of living in peace in a community.

.....
.....
192. Why are school children advised to put on uniform?

.....
.....
193. How can the government overcome the problem of violation of human rights?

.....
.....
194. Give any one reason why R. Katonga empties its water in L. Victoria.

.....
.....
195. What is Pan Africanism?

.....
.....
196. Give any one example of relationship in an ethnic group of Uganda.

.....
.....
197. Give any one unsafe way of using the road by people.

.....
.....
198. State any one reason why people participate in various economic activities in our community.

199. State any one way Africans protested against colonial rule in Uganda.

.....
.....

200. Name the number of compass directions found on a semi cardinal point.

.....
.....

For questions 36 – 40, answer Either Christianity Or Islam but not both alternatives.

201. Either: Name the first disciple Jesus called.

.....
.....

Or: Name the first man who believed in Prophet Muhammad’s preaching?

.....
.....

202. Either: State one way a Christian can comfort orphans?

.....
.....

Or: State one way a Muslim can help orphans?

.....
.....

203. Either: Mention one thing Christians offer during their sacrifice to God.

.....
.....

Or: Mention one thing Muslims offer during their sacrifice to Allah.

.....
.....

204. Either: Who is the mother of Jesus?

.....
.....

Or: Why did the news about the conception of Isa surprise Mariam?

.....
.....
205. Either: Name one lesson Christians learn from Jesus Christ's suffering.

.....
.....
Or: Name one lesson Muslims learn from Prophet Muhammad's suffering.

SECTION B

206. Study the map below and use it to answer questions that follow:



(a) Name the stone age sites marked with letters.

P S

.....
.....
(b) Name the town marked X on the map.

.....
.....
(c) Name the river that forms a natural boundary between Tanzania and country marked M on the map.

.....
.....

207. (a) What type of transport connects Uganda to the coast of East Africa?

.....
.....

(b) Give two reasons why the colonial government funded the construction of Uganda railway.

i.
.....

ii.
.....

(c) How did the development of the above type of transport mentioned in (a) lead to the economic development of Uganda?

.....
.....
.....
.....

208. (a) Write down two types of ocean currents that affect the climate of Africa.

i.
.....

ii.
.....

(b) What type of ocean currents help to bring rainfall?

.....
.....

(c) Give one human activity that helps to increase the amount of rainfall received in an area.

.....
.....

209. (a) Name the first group of European traders to reach the coast of West Africa.

.....
.....

(b) Give any two reasons why the group of traders you have named in (a) above were interested in coming of West Africa.

- i.
.....
- ii.
.....

(c) Mention any one challenge the European traders faced at the cost of West Africa?

.....
.....

210. (a) Give any two causes of the maji maji rebellion in Tanganyika.

- i.
.....
- ii.
.....

(b) State any two ways in which the maji maji rebellion benefited the people of Tanganyika.

- i.
.....
- ii.
.....

211. (a) Name one country in Africa which is not a member of the African Union.

.....
.....

(b) Why did the country you have named in (a) above suspend its membership from the African Union?

.....
.....

(c) What can the government of Uganda do to attract more tourists into the country?

- i.
.....
- ii.
.....

212. (a) Name the major tourist attraction found in Mgahinga National Park.

.....
.....
(b) Give any two reasons why the tourism industry in Uganda has developed.

i.
.....

ii.
.....

(c) what can the government of Uganda do to attract more tourists into the country.

.....
.....

213. (a) Name the places where the following minerals are mined in South Africa:

i. Gold
.....
.....

ii. Diamond
.....
.....

(b) State any two ways in which gold mining has contributed to the economic development of South Africa.

i.
.....

ii.
.....

214. (a) Give the meaning of the following terms:

i. Population
.....
.....

ii. Population structure
.....
.....

(b) State any two reasons why industrialized towns have higher population.

i.
.....

ii.
.....

215. (a) State the arm of government which is under the following groups of people belong:

i. Civil servants
.....
.....

ii. Lawyers
.....
.....

(b) Mention any two roles of the government to its citizens.

i.
.....

ii.
.....

For questions 51 – 55, answer Either Christianity Or Islam but not both alternatives.

216. Either:

(a) According to Christian faith, who gives the baptism sacrament?

.....
.....

(b) State two roles of Bishops in the Christian churches.

i.
.....

ii.
.....

(c) Give one reason why Christians kneel down during prayer in the church?

.....
.....

Or:

(a) According to the Muslims, who is the leader of worshippers in the mosque?

.....
.....

(b) State any two duties played by Imaam in the mosque.

- i.
.....
- ii.
.....

(c) Give one reason why ladies sit behind men in mosque during prayers.

.....
.....

217. Either: “Forgive them, father! They don’t know what they are doing.”

(a) Who said these statements?

.....
.....

(b) Why did the above person say so?

.....
.....

(c) As Christians, give any two lessons we learn from the above statement.

- i.
.....
- ii.
.....

Or: “Lord these people do not know that what I tell them is the truth; they are doing this because they think it is the right thing to do. Don’t be angry with them and don’t punish them but open their eyes to the truth and help them to accept it.”

(a) Who said these prayers?

.....
.....

(b) Why did the above person say so?

.....
.....

(c) As a Muslim, state two lessons you learn from the above prayer?

- i.
.....
- ii.
.....

218. Either:

(a) Name the man who helped Jesus Christ to carry the cross.

.....
.....

(b) State two ways how you can help your friends who has fallen sick at school.

- i.
.....
- ii.
.....

(c) Give one reason why it is important to care for God's creation?

.....
.....

Or:

(a) Name one young man who shared with prophet Muhamad sufferings.

.....
.....

(b) As a Muslim, state two ways how you can help your friend who has fallen sick at school.

- i.
.....
- ii.
.....

(c) State one reason why it is important to care for Allah's creation.

.....
.....
219. Either:

(a) According to Bible teachings, who built an ark?
.....
.....

(b) Why did he build the ark?
.....
.....

(c) What lesson do you learn from the story of the ark?

i.
.....

ii.
.....

Or:

(a) According to Qur'anic teaching, which prophet built an ark?
.....
.....

(b) Mention one importance of the Ark to the prophet and his followers in (a) above.
.....
.....

(c) Give two lessons Muslims learn from prophet mentioned above.

i.
.....

ii.
.....

220. Either:

(a) Name the two sons of the first man to be created by God.

i. ii.
.....

(b) State two causes of Abel's death.

i.
.....

ii.
.....

Or:

(a) Name two examples of committed messengers who were sent by Allah.

i.
.....

ii.
.....

(b) State roles played by prophet Ibrahim to Muslim.

i.
.....

ii.
.....

*****END*****



Moderated item 5
SOCIAL STUDIES AND RELIGIOUS EDUCATION
Time Allowed: 2 Hours 15 Minutes

SECTION A

221. Name the symbol that helps to show the location of the school.

.....
.....

222. Give any one social service centre in the community.

.....
.....

223. Why should a map have a key?

.....
.....

224. How helpful is rainy weather to crop farmers?

.....
.....

225. Give one responsibility of a child at school.

.....
.....

226. How can one become a political leader in the district?

.....
.....

227. Give any one value of having Bye laws at the district level.

.....
.....

228. Name the example of a resource where most human activities are done.

.....
.....
229. Give one reason why mangrove timber is preferred for making boats and ships.

.....
.....
230. Mention any one benefit of high population to a country.

.....
.....
231. Give any one advantage of using a mobile telephone as a means of communication.

.....
.....
232. In which way is a midwife helpful in the community.

.....
.....
233. Why did the member countries of ECOWAS form ECOMOG?

.....
.....
234. Mention the landlocked country found in the horn of Africa.

.....
.....
235. Give one way the legislature helps judiciary to do its work in the country.

.....
.....
236. State one reason why a country like Uganda should have a national language.

.....
.....
237. State one way in which poor methods of growing crops lead to the destruction of environment.

238. Give any one role of citizens in a country.

.....
.....

239. Why is Ignatius Kangave Musaaazi remembered in the struggle for independence in Uganda?

.....
.....

240. Name the ethnic group that settled in “Pubungu” before moving to other areas.

.....
.....

241. Mention one danger of landslides to the people who live near highland areas.

.....
.....

242. Give any one way in which countries of East Africa benefits from their common market.

.....
.....

243. State one way missionaries promoted economic development in Uganda.

.....
.....

244. Why should the people of East Africa have knowledge of road signs and symbols?

.....
.....

245. Mention one way swamps are useful to man.

.....
.....

246. Name the latitude which is marked $22\frac{1}{2}^{\circ}$ on the map of Africa.

.....
.....

247. What political change took place in Uganda on 9th October, 1962?

.....
.....
248. Facing North, John turned an angle at 135°clockwise which new direction is he facing?

.....
.....
249. Apart from rules and regulations, what other way is peace promoted at school?

.....
.....
250. How useful are donkeys to the people of Kapchorwa district?

.....
.....
251. Why does the government of Uganda encourage the growing of non-traditional cash crops?

.....
.....
252. Name the type of currency which was introduced by Arabs in East Africa.

.....
.....
253. What is Great Trek?

.....
.....
254. Name the traditional cash crop grown by both the Chagga and Bagisu on mountain slopes.

.....
.....
255. State the political importance of River Semiliki to Uganda and DRC.

.....
.....
For questions 36 – 40, answer Either Christianity Or Islam but not both alternatives.

256. Either:

What name is given to the day when Jesus Christ was born?

.....
.....

Or:

Mention the city in which prophet Muhammad was born?

.....
.....

257. Either:

What did Jesus Christ do to show love to his people?

.....
.....

Or:

What did Prophet Muhammad do to show love to his people?

.....
.....

258. Either:

What sacrament makes one to join God's family?

.....
.....

Or:

What pillar makes one to join Islam?

.....
.....

259. Either:

How did God show love to Noah and his family?

.....
.....

Or:

How did God show love to Nuuhu and his family?

.....
.....
260. Either:

What lesson do you learn from the resurrection of Jesus Christ?

.....
.....
Or:

What lesson do you learn from the action of Prophet Muhammad?

.....
.....
SECTION B

261. (a) Name any two groups of people who use a compass in their daily life.

i.
.....

ii.
.....

(b) Give one reason why the people you have mentioned in (a) above use a map of an area.

.....
.....
(c) State one reason why the people you have mentioned in (a) above use a compass.

.....
.....
262. (a) What term is used to mean a home and its surrounding?

.....
.....
(b) Give any two qualities of a good homestead.

i.
.....

ii.
.....

(c) How can people promote unity at their home?

.....
.....

263. (a) Mention any one factor that can attract a high population in an area.

.....
.....

(b) Give any two challenges of high population in urban areas today.

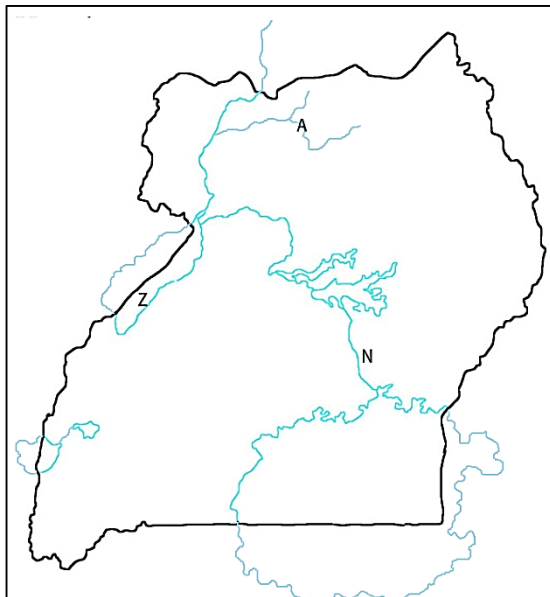
i.
.....

ii.
.....

(c) State any one way of controlling high population growth in an area.

.....
.....

264. Use the map below and answer questions that follow.



(a) Name the river marked (A) on the map.

.....
.....

(b) State any two economic activities done in a place marked Z on a map.

i.
.....

ii.
.....

(c) Why is water transport on the part of the river marked N difficult?

.....
.....

265. (a) Mention any one service provided by UNICEF to children in Uganda.

.....
.....

(b) Write down any two challenges people face in meeting their needs in the community.

i.
.....

ii.
.....

(c) Give one solution to problems facing people in meeting their needs.

.....
.....

266. (a) Which organ of the Organization of African Unity (OAU) was headed by Secretary General?

.....
.....

(b) Give any two duties of African Union.

i.
.....

ii.
.....

(c) Why does African Union (AU) need a standing army today?

.....
.....

267. (a) Name the member in the local council one (L.C.I) committee responsible for children's welfare.

.....
.....

(b) Give any two dangers of child abuse in the community.

i.
.....

ii.
.....

(c) State any one way of reducing child abuse in the community.

.....
.....

268. (a) What title is given to a person who leads electoral commission in Uganda?

.....
.....

(b) Apart from pens, ink and inkpads list down any other two materials used during the voting process.

.....
.....

(c) Why should a country like Uganda carry out regular elections?

.....
.....

269. Match the following raw materials with their products as on the table below.

List A

List B

(a) Crude oil

cement

(b) Clay

ropes

(c) Limestone

diesel

(d) Sisal

pots

(a) Crude oil

.....

.....

(b) Clay

.....

.....

(c) Limestone

.....

.....

(d) Sisal

.....

.....

270. (a) Name the collaborator who extended the British rule to Eastern Uganda.

.....

.....

(b) Give any two ways in which the British extended their rule to different parts of Uganda.

i.

.....

ii.

.....

(c) Give one reason why it was simple for the British to rule Buganda than Karamoja.

.....

.....

For questions 51 – 55, answer Either Christianity Or Islam but not both alternatives.

271. Either:

(a) Who did God send to earth to save the sinners?

.....
.....

(b) Mention two things the above-named person did.

- i.
.....
- ii.
.....

(c) What does the death of the above named person on the cross show to the people?

.....
.....

Or:

(a) Who was the last prophet in Islam?

.....
.....

(b) Mention two things the person named above did.

- i.
.....
- ii.
.....

(c) How is the person named above important in Islam?

.....
.....

272. Either:

(a) What two things did God do to create good relationship with his people through Moses?

- i.
.....
- ii.
.....

(b) How can Christians make good relationship with God today?

.....
.....
(c) Give one reason why Christians should have good relationship with God.
.....
.....

Or:

(a) What two things did Allah do to create good relationship with the people through Musa?

i.
.....

ii.
.....

(b) How can Muslims make good relationship with Allah?
.....
.....

(c) Give one reason why Muslims should have good relationship with Allah.
.....
.....

273. Either:

(a) Give two similarities between Christians and Islam.

i.
.....

ii.
.....

(b) Give two differences between Christianity and Islam.

i.
.....

ii.
.....

Or:

(a) Give two similarities between Christianity and Islam.

i.
.....

ii.
.....

(b) Give two similarities between Islam and Christianity.

i.
.....

ii.
.....

274. Either:

(a) Who created heaven and earth?

.....
.....

(b) In which two ways can a Christian thank God?

i.
.....

ii.
.....

(c) Give one reason why God created mankind.

.....
.....

Or:

(a) Who created heaven and earth?

.....
.....

(b) In which two ways can a Muslim thank Allah?

i.
.....

ii.
.....

(c) Give one reason why Allah created mankind.

.....
.....

275. Either:

(a) What name is given to the first book in the Bible?

.....
.....

(b) Why are the first four books in the New Testament called Gospel?

.....
.....

(c) In which two ways is the Bible useful to Christians?

i.
.....

ii.
.....

Or:

(a) What name is given to the first Chapter in the Qur'an?

.....
.....

(b) Which prophet was given the Qur'an?

.....
.....

(c) How is the Qur'an useful to Muslims?

.....
.....

(d) How do Muslims respect the Qur'an?

.....
.....

*****END*****